



# INDIAN SCHOOL AL WADI AL KABIR

DEPARTMENT OF MATHEMATICS (2021 – 2022)

TOPIC: Time and calendar

WORKSHEET-1

RESOURCE PERSON: Mrs Hamin V

NAME: \_\_\_\_\_ CLASS: II SEC: \_\_\_\_\_ DATE: \_\_\_\_\_

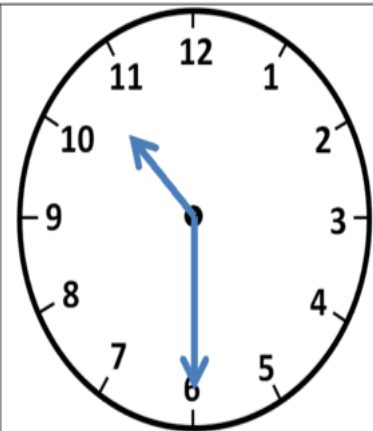
## What time is it?



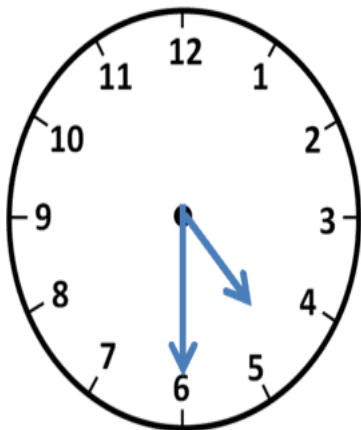
Half past 3  
3:30



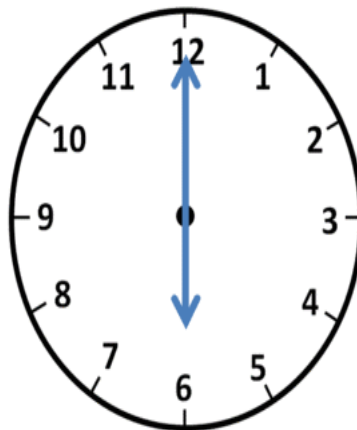
\_\_\_\_\_



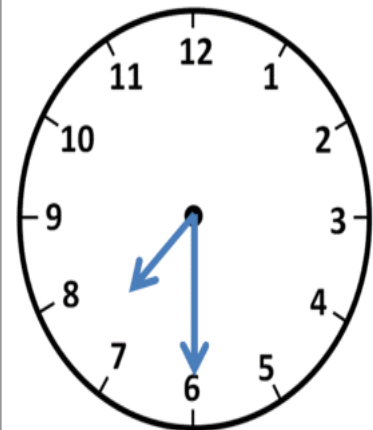
\_\_\_\_\_



\_\_\_\_\_



\_\_\_\_\_



\_\_\_\_\_



# INDIAN SCHOOL AL WADI AL KABIR

DEPARTMENT OF MATHEMATICS (2021 – 2022)







TOPIC: Time and calendar

WORKSHEET-2

RESOURCE PERSON: Mrs. Hamin

NAME: \_\_\_\_\_ CLASS: II SEC: \_\_\_\_\_ DATE: \_\_\_\_\_




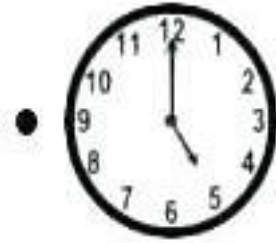

1) Look at the clock pictures given below. Tick the correct option of time shown.

 <input type="checkbox"/> 6:00 <input type="checkbox"/> 7:00 <input type="checkbox"/> 8:00 <input type="checkbox"/> 9:00	 <input type="checkbox"/> 2:00 <input type="checkbox"/> 3:00 <input type="checkbox"/> 4:00 <input type="checkbox"/> 5:00
 <input type="checkbox"/> 7:00 <input type="checkbox"/> 8:00 <input type="checkbox"/> 9:00 <input type="checkbox"/> 10:00	 <input type="checkbox"/> 7:00 <input type="checkbox"/> 8:00 <input type="checkbox"/> 9:00 <input type="checkbox"/> 10:00
 <input type="checkbox"/> 11:00 <input type="checkbox"/> 12:00 <input type="checkbox"/> 13:00 <input type="checkbox"/> 14:00	 <input type="checkbox"/> 1:00 <input type="checkbox"/> 2:00 <input type="checkbox"/> 3:00 <input type="checkbox"/> 4:00

2) Answer the questions below.

- A clock measures \_\_\_\_\_.
- The long hand is called the \_\_\_\_\_ hand.
- It takes \_\_\_\_\_ minutes to move from one number to another.
- There are \_\_\_\_\_ months in a year.
- A leap year comes in every \_\_\_\_\_ years.

3) Match and draw lines to connect each analogue clock with the correct digital clock.





# INDIAN SCHOOL AL WADI AL KABIR

DEPARTMENT OF MATHEMATICS (2021 – 2022)

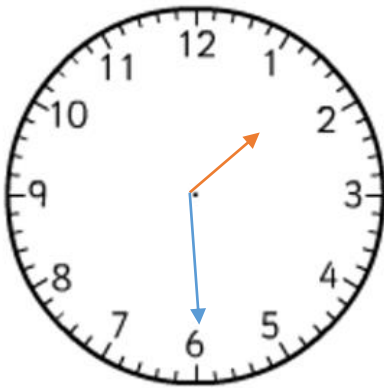
TOPIC: Time and calendar

CHAPTER CHECK UP

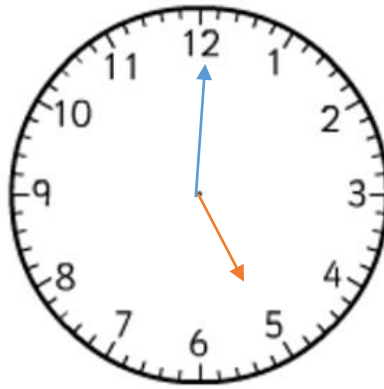
RESOURCE PERSON: Mrs Hamin V

NAME: \_\_\_\_\_ CLASS: II SEC: \_\_\_\_\_ DATE: \_\_\_\_\_

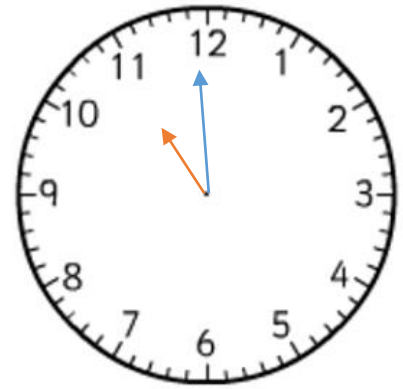
**Q1. Write the digital time.**



\_\_\_\_\_



\_\_\_\_\_



\_\_\_\_\_

**Q2. Read the given time given under each clock. Draw the hands on the face of the given clocks accordingly.**



9:00



6 o' clock



7:30

**Q3. Fill in the missing months of the year in the calendar.**

January

July

March

October

June

November

**Q4. Fill in the blanks.**

1. Today is \_\_\_\_\_. (day)

2. Yesterday was \_\_\_\_\_. (day)

3. Tomorrow will be \_\_\_\_\_. (day)

4. We are in the month of \_\_\_\_\_.

5. Which month comes after February? \_\_\_\_\_

6. We are in the year \_\_\_\_\_.



# INDIAN SCHOOL AL WADI AL KABIR

DEPARTMENT OF MATHEMATICS (2021 – 2022)

TOPIC: **Mental Math**

WORKSHEET

RESOURCE PERSON: Mrs. Hamin V

NAME : \_\_\_\_\_ CLASS: II SEC: \_\_\_\_\_ DATE: \_\_\_\_\_

**Choose the correct answer from the options given and write the letter in the box.**

1) The next even number that comes after 899 is \_\_\_\_\_.

- a) 901            b) 900            c) 800

2) 9 hundred + 8 tens + 6 ones is \_\_\_\_\_

- a) 986            b) 988            c) 896

3) 1 more than 874 is \_\_\_\_\_

- a) 888            b) 873            c) 875

4) 1 less than 600 is \_\_\_\_\_

- a) 589            b) 598            c) 599

5) The sum of 25 and 5 is \_\_\_\_\_

- a) 30            b) 35            c) 20

6) The place value of the 3 in the number 637 is \_\_\_\_\_

- a) 3            b) 300            c) 30

7) 6 into 6 is \_\_\_\_\_

- a) 36            b) 38            c) 42

8) The number between 959 and 961 is \_\_\_\_\_

- a) 962            b) 958            c) 960

9) Mohan has 50 balls. He gave his friend 5 balls. How many balls are left with him?

- a) 45            b) 50            c) 55

10)  $800 + 60 + 0 =$  \_\_\_\_\_

- a) 800            b) 860            c) 806